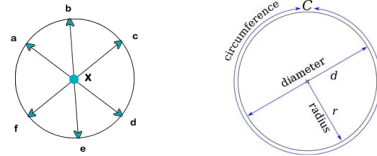


Notes - Circles

Circles

Definitions

- A circle is a shape where all of its points are _____ from the center.
- The _____ is the distance from the center to any point on the circle.
- The _____ is the distance between any two points on the circle while going through the center.
- The _____ is the distance around the circle. This is similar to the _____.



Time for Pi?

- If you measure the distance around a circle (circumference) and divide it by the distance across the circle through the center (diameter), you will always come close to an approximate value of 3.14159265358979323846...

- We use the Greek letter π to represent this value. The number goes on forever. However, for our calculations, we will round to 3.14.

$$\pi = \frac{\text{circumference}}{\text{diameter}}$$

The area of a circle can be found by multiplying pi ($\pi = 3.14$) by the radius squared. Find the area of the circle below.

5 cm

Answer

Area of a Circle = πr^2

Find the Area of the Circles

r = 2 cm

d = 1 cm

d = 5 cm

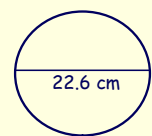
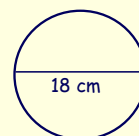
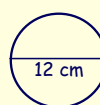
r = 1.5 cm

Finding Circumference using the Diameter

The distance across a circle through the center is called the **diameter**. When given the diameter of a circle, you can find the circumference by using a simple formula.

Circumference = _____

Using the formula provided, find the circumference of the following circles.

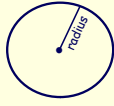


Notes - Circles

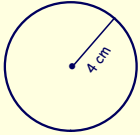
Finding Circumference using the Radius

A straight line from the center of a circle to one of its points is called the radius. When given the radius of a circle, you can find the circumference by using a simple formula.

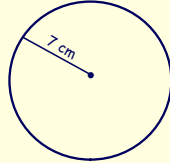
Circumference = _____



Using the formula provided, first find the circumference of the circles.



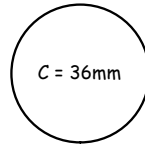




But can we go... backwards??

How can we find the radius or diameter of a circle when we are only given the circumference?

Find the radius of the circle below.

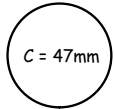


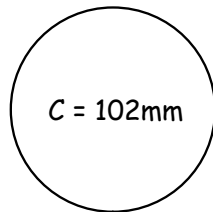
Find the diameter of the circle below.



Try a couple more!

Find the radius and diameter of both circles below.







The radius of this pizza is 2 inches. What is the diameter?

The radius of this wheel is 4 inches. What is the circumference?



The diameter of this CD is 11 cm. What is the circumference?

The diameter of this coin is 10 mm. What is the radius?



Can you fill in the table

Round your answers to the nearest tenth place.

Radius	Diameter	Circumference	Area
•	8 cm	•	•
•	•	22 cm	•