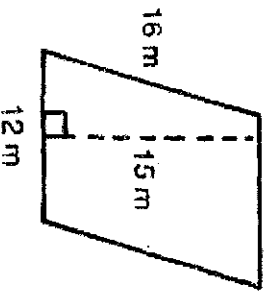
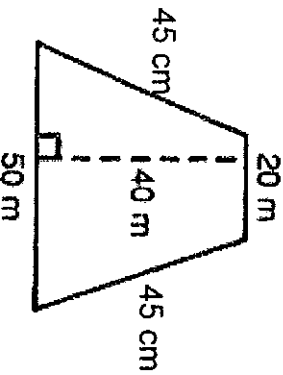


Name: _____

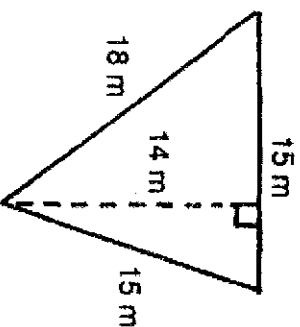
Find the Perimeter and Area of each figure. Don't forget to label your answers.



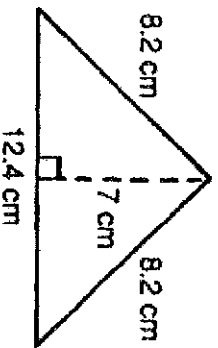
- 1) Perimeter = _____
2) Area = _____



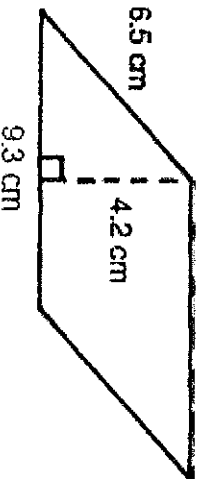
- 3) Perimeter = _____
4) Area = _____




- 5) Perimeter = _____
6) Area = _____



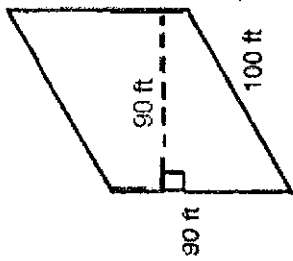
- 7) Perimeter = _____
8) Area = _____



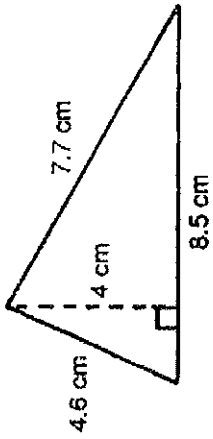
- 9) Perimeter = _____
10) Area = _____



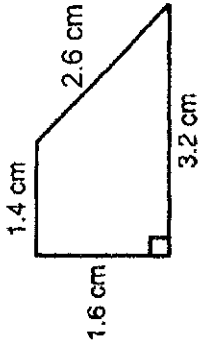
- 11) Perimeter = _____
12) Area = _____



- 13) Perimeter = _____
 14) Area = _____



- 15) Perimeter = _____
 16) Area = _____



- 17) Perimeter = _____
 18) Area = _____

Mixed Word Problems.

- 19) The area of a parallelogram is 60 ft^2 . The height is 5 ft. How long is the base?
- 20) The height of a parallelogram is 4.5 cm. The base is twice the height. What is the area?
- 21) The longest side of a triangular sail is 9 m long. The second side is 1.5 m shorter than the longest side. The third side is half the length of the longest side. What is the perimeter? _____ m
- 22) The width of a rectangular poster is 16 in. Its length is twice its width. Find its perimeter. _____ in.